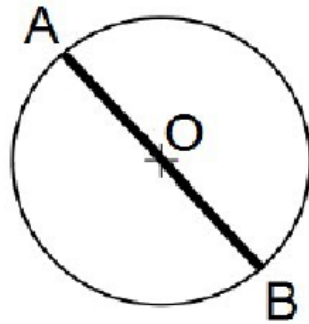
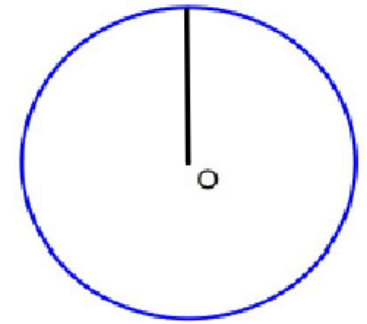


Draw a .....  
of center .... and a diame-  
ter .....




Draw a ..... and  
a ray of the circle.

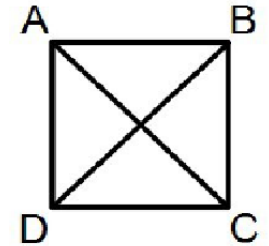
The ..... is O.



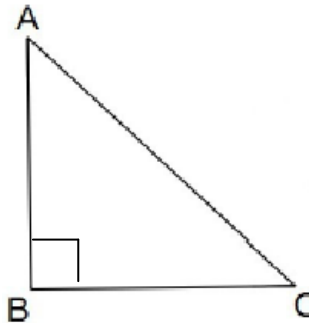
Draw a .....  
ABCD



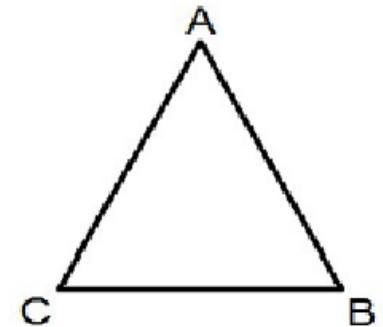
Draw a ..... ABCD  
and the diagonals.



Draw a .....  
.....ABC

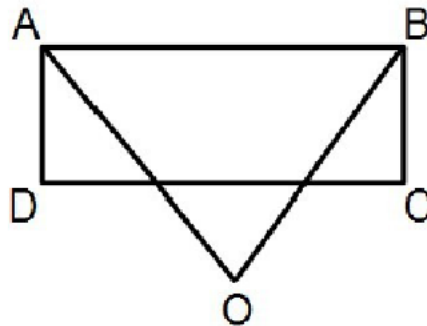


Draw a .....  
ABC where  $AB = AC$ .



Draw a rectangle .....

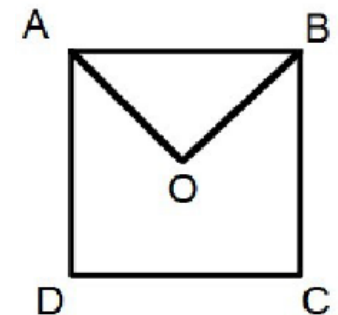
Place a ..... O out-  
side the .....



Join point A, O and ....  
with a ruler.

Draw a .....  
ABCD

Place a point O .....  
the square.

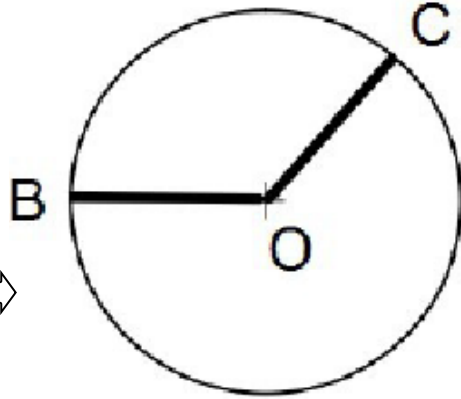


Join point A, O and B  
with .....

Draw a circle of ..... O

Place two ..... B  
and C on the .....

..... the rays OB  $\Leftrightarrow$   
..... OC.

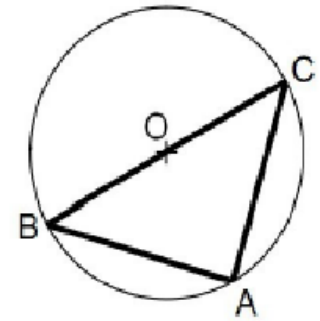


Draw a ..... of  
center .....

Draw diameter BC.  $\Leftrightarrow$

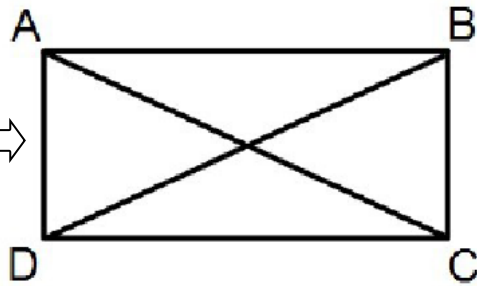
Place a point ..... on the  
circle.

Join the segments .....  
and .....



..... a rectangle  
ABCD and the

.....  $\Leftrightarrow$



Draw two perpendicular  
segments ..... and .....

..... the points A, B,  
C and D.  $\Leftrightarrow$

